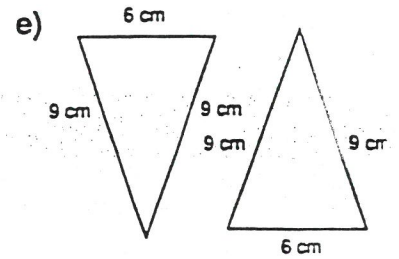
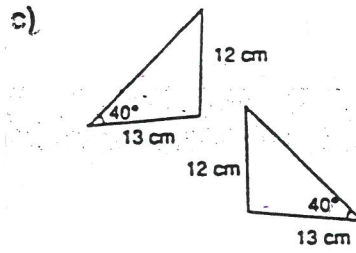
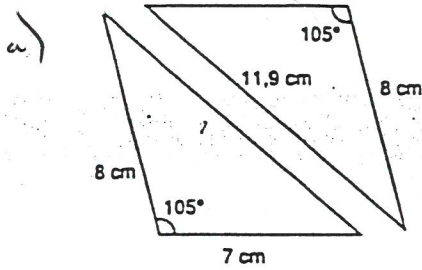
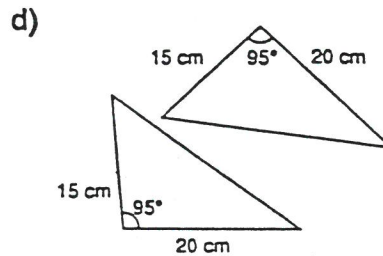
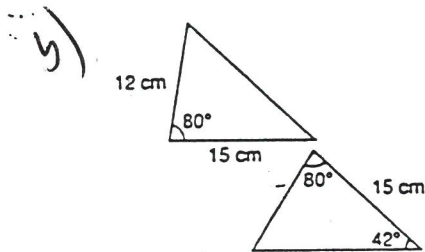


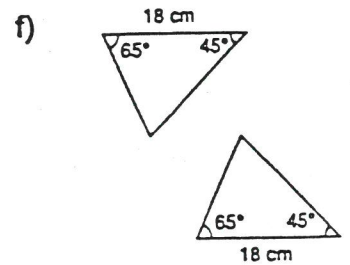
1. Peut-on conclure que les triangles sont congrus si l'on ne connaît que les mesures des angles ou des côtés indiqués sur les figures? Si oui, indique le cas de congruence.



C-C-C



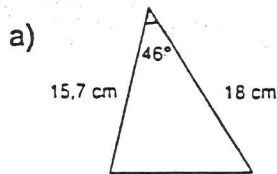
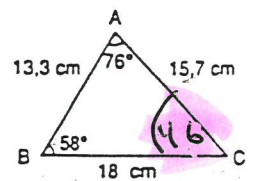
C-A-C



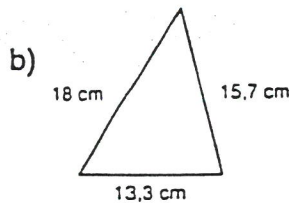
A-C-A

2. Soit le triangle ABC ci-contre.

Vérifie si les triangles suivants, dont certaines mesures sont indiquées, sont congrus au triangle ABC. Indique ensuite le cas de congruence utilisé.



C-A-C



C-C-C

